
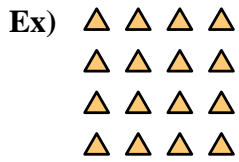




Write each array as an addition problem and solve.



Answers

Ex. 4+4+4+4=16

1. _____

2. _____

3. _____

4. _____

5. _____

6. _____

7. _____

8. _____

9. _____



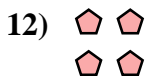


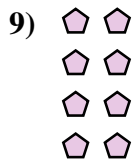


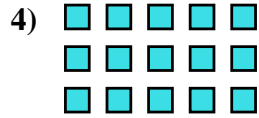
10. _____

11. _____

12. _____


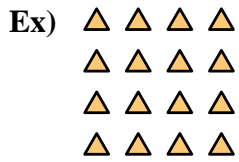
13. _____

14. _____





Write each array as an addition problem and solve.



Answers

Ex. 4+4+4+4=16

1. 4+4=8

2. 2+2+2+2+2=10

3. 4+4+4=12

4. 5+5+5=15

5. 3+3=6

6. 5+5+5+5=20

7. 3+3+3+3+3=15

8. 5+5=10

9. 2+2+2+2=8

10. 3+3+3+3=12

11. 3+3+3=9

12. 2+2=4

13. 2+2+2=6

14. 4+4+4+4+4=20

